


WALT: find the Area of shapes


Please complete by Wednesday 15<sup>th</sup> June. Either print and complete or write your answers out on paper 😊 Each square is 1cm<sup>2</sup>. Fantastic work so far! Mrs Freeman

1)



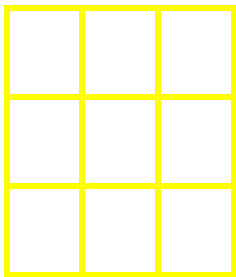
Area =

2)




Area =

3)



Area =

4)



Area =

5cm

2cm